

## 19. Three-Dimensional Figures

### Exercise 19A

#### 1. Question

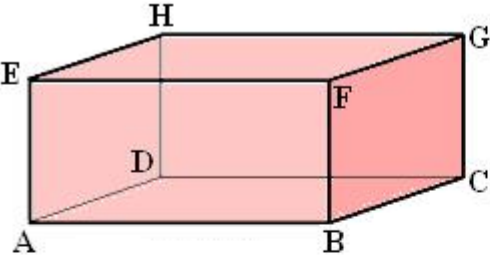
Write down the number of faces of each of the following figures:

- A. Cuboid
- B. Cube
- C. Triangular prism
- D. Square pyramid
- E. Tetrahedron

#### Answer

- A. 6

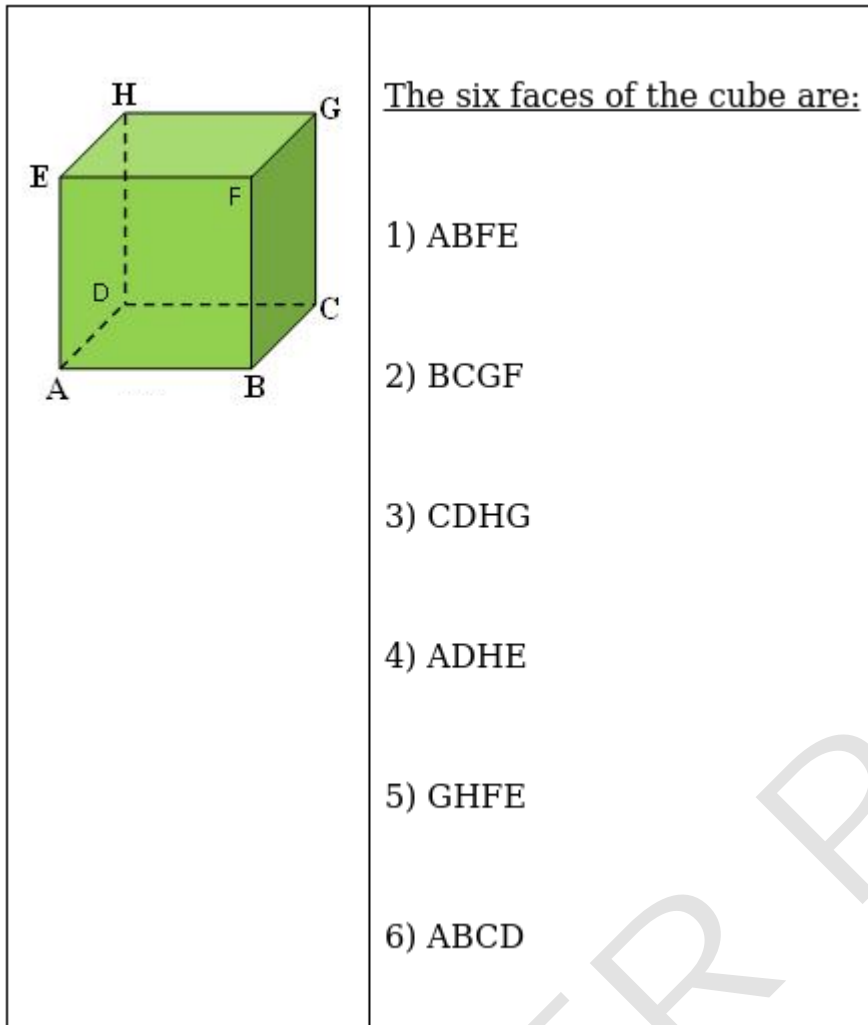
Face is also known as sides. A Cuboid has six faces.

	<p><u>The six faces of the cuboid are:</u></p> <ol style="list-style-type: none"><li>1) ABFE</li><li>2) BFGC</li><li>3) GHDC</li><li>4) HEAD</li><li>5) DCBA</li><li>6) HGFE</li></ol>
---	--

Book, Matchbox, Brick etc. are examples of Cuboid.

B.6

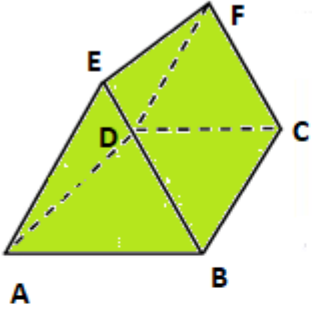
A Cube has six faces and all faces are equal in length.



Sugar Cubes, Dice etc. are examples of Cube.

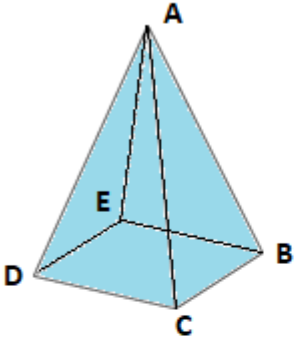
C. 5

A Triangular prism has two triangular faces and three rectangular faces.

	<p><u>The five faces of the triangular prism are:</u></p> <ol style="list-style-type: none"><li>1) ABE</li><li>2) ABCD</li><li>3) BCDE</li><li>4) ADEF</li><li>5) FDC</li></ol>
---	---

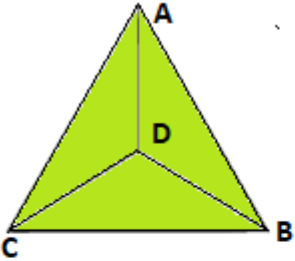
D. 5

A Square pyramid has one square face as a base and four triangular faces as the sides. So, Square pyramid has total five faces.

	<p><u>The five faces of the square pyramid are:</u></p> <ol style="list-style-type: none"><li>1) ABC</li><li>2) ACD</li><li>3) ABE</li><li>4) AED</li><li>5) BEDC</li></ol>
---	---

E. 4

A Tetrahedron (Triangular Pyramid) has one triangular face as a base and three triangular faces as the sides. So, Tetrahedron has total four faces.

	<p><u>The five faces of the tetrahedron are:</u></p> <ol style="list-style-type: none"> <li>1) ABC</li> <li>2) ACD</li> <li>3) ABE</li> <li>4) AED</li> <li>5) BEDC</li> </ol>
---	--

## 2. Question

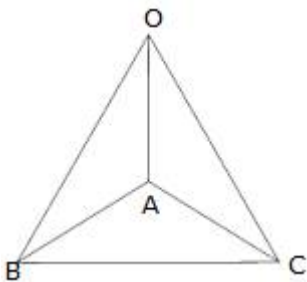
Write down the number of edges of each of the following figures:

- A. Tetrahedron
- B. Rectangular pyramid
- C. Cube
- D. Triangular prism

## Answer

A. 6

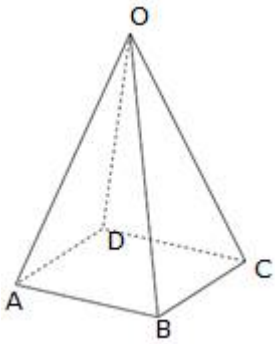
A Tetrahedron has six edges.



OA, OB, OC, AB, AC, BC are the 6 edges.

B. 8

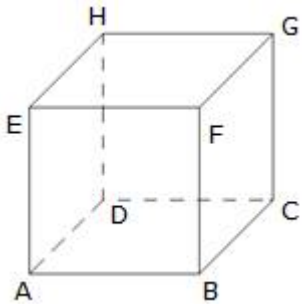
A Rectangular Pyramid has eight edges.



AB, BC, CD, DA, OA, OB, DC, OD are the 8 edges.

C. 12

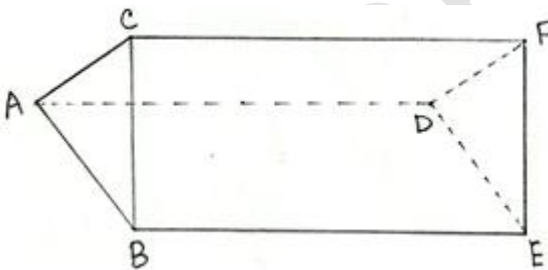
A Cube has twelve edges.



AB, BC, CD, DA, EF, FG, GH, HE, AE, DH, BF, CG are the edges.

D. 9

A Triangular prism has nine edges.



AB, BC, CA, DE, EF, FD, AD, BE, CF are the 9 edges.

### 3. Question

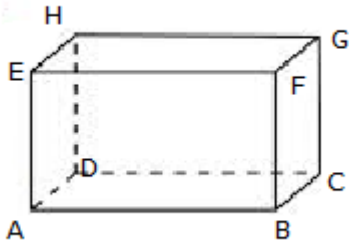
Write down the number of vertices of each of the following figures:

- A. Cuboid
- B. Square pyramid
- C. Tetrahedron
- D. Triangular prism

**Answer**

A. 8

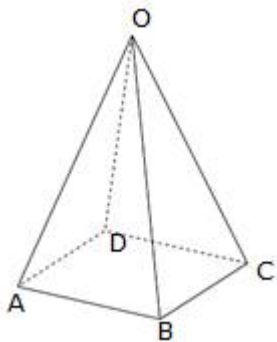
A Cuboid has eight vertices.



A, B, C, D, E, F, G, H are the 8 vertices.

B. 5

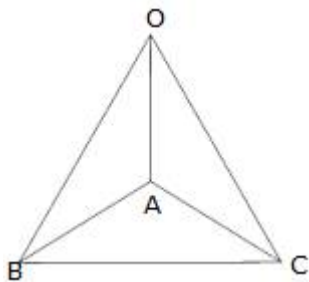
A Square Pyramid has five vertices.



O, A, B, C, D are the 5 vertices.

C. 4

A Tetrahedron has four vertices.

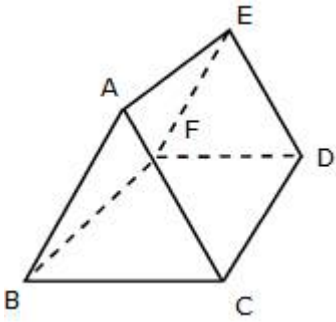


O, A, B, C are the vertices.

D. 6

A Triangular prism has six vertices.





A, B, C, D, E, F are the vertices.

#### 4. Question

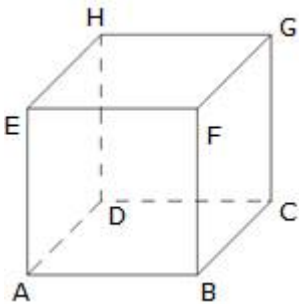
Fill in the blanks:

- A. A cube has..... vertices, .....edges and .....faces.
- B. The point at which three faces of a figure meet is known as its.....
- C. A cuboid is also known as a rectangular.....
- D. A triangular pyramid is called a.....

#### Answer

A. 8, 12, 6

A Cube has 8 vertices, 12 edges and 6 faces.



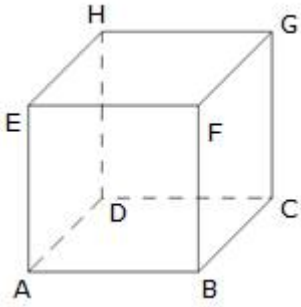
A, B, C, D, E, F, G, H are the 8 vertices.

AB, BC, CD, DA, EF, FG, GH, HE, AE, DH, BF, CG are the 12 edges.

ABCD, EFGH, ADHE, BCGF, ABFE and DCGH are the 6 faces

B. vertex

Vertex is the point where faces meet.



A is the vertex for AB, AD and EA.

C. Prism

A cuboid is also known as rectangular prism because a rectangular prism has six rectangular shaped sides with all sides at an angle  $90^\circ$  to each other.

Therefore, it can also be called a cuboid.

D. Tetrahedron

The tetrahedron is a polyhedron with a flat polygon base and the triangular faces that connect the base to a common point. Therefore, it is called a triangular pyramid.

## Exercise 19B

### 1. Question

Define Euler's relation between the number of faces, number of edges and number of vertices for various 3-dimensional figures.

### Answer

Leonhard Euler has defined the relation between the number of faces, number of edges and number of vertices for various 3-dimensional figures is called as Euler's formula. This formula works with shapes called Polyhedron. A Polyhedron is a closed solid shape which has flat faces and straight edges like cube.

According to him

$$F + V - E = 2$$

Where F denotes the number of face

V denotes the number of vertices

E denotes the number of edges.

Shape	Faces	Vertices	Edges	$F + V - E$
Cube	6	8	12	2
Octahedron	8	6	12	2

## 2. Question

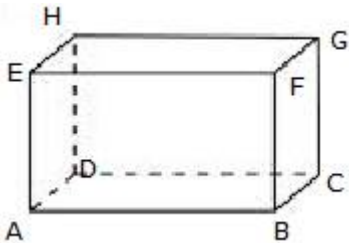
How many edges are there in a

- A. cuboid
- B. tetrahedron
- C. triangular prism
- D. square pyramid?

## Answer

- A. 12

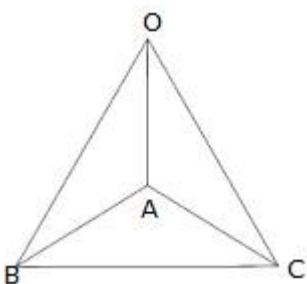
A Cuboid has twelve edges.



AB, BC, CD, DA, EF, FG, GH, HE, AE, DH, BF, CG are the 12 edges.

- B. 6

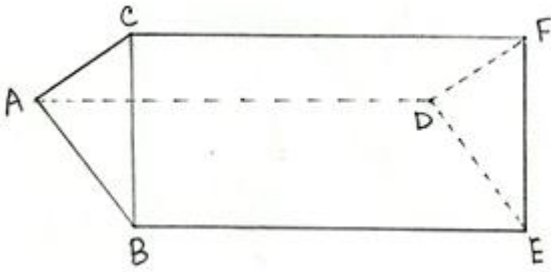
A Tetrahedron has six edges.



OA, OB, OC, AB, AC, BC are the 6 edges.

C. 9

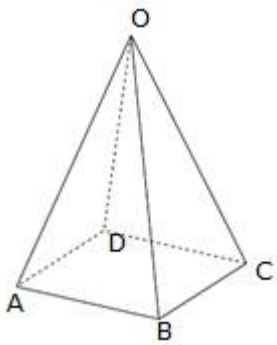
A Triangular prism has nine edges.



AB, BC, CA, DE, EF, FD, AD, BE, CF are the edges.

D. 8

A Square Pyramid has eight edges.



AB, BC, CD, DA, OA, OB, DC, OD are the edges.

### 3. Question

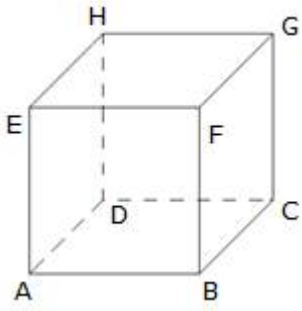
How many faces are there in a

- A. cube
- B. pentagonal prism
- C. tetrahedron
- D. pentagonal pyramid?

### Answer

A. 6

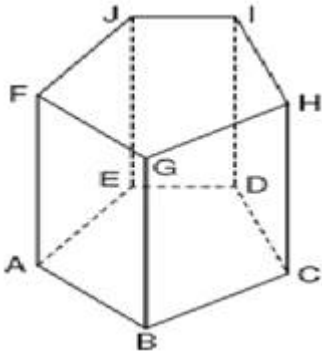
A Cube has six faces.



ABCD, EFGH, ADHE, BCGF, ABFE and DCGH are the 6 faces

B. 7

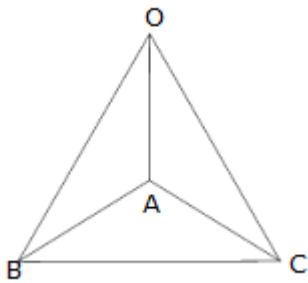
A pentagonal prism has seven faces.



ABGF, AEJF, EDIJ, CDIH, BCGH, ABCDE and FGHIJ are the faces.

C. 4

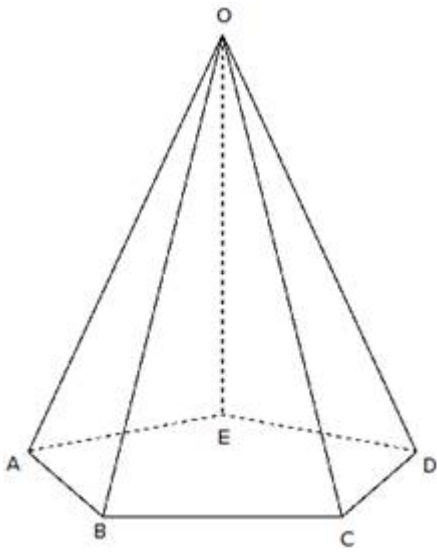
A Tetrahedron has four faces



OAB, OAC, OBC and ABC are the faces.

D. 6

A pentagonal pyramid has six faces.



OAB, OBC, OCD, OAE, ODE and ABCDE are the faces.

#### 4. Question

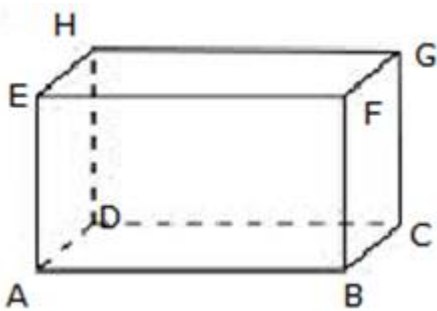
How many vertices are there in a

- A. cuboid
- B. tetrahedron
- C. pentagonal prism
- D. square pyramid?

#### Answer

A. 8

A Cuboid has eight vertices.

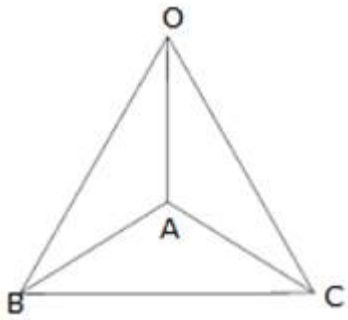


A, B, C, D, E, F, G, H are the vertices.

B. 4

A Tetrahedron has four vertices.

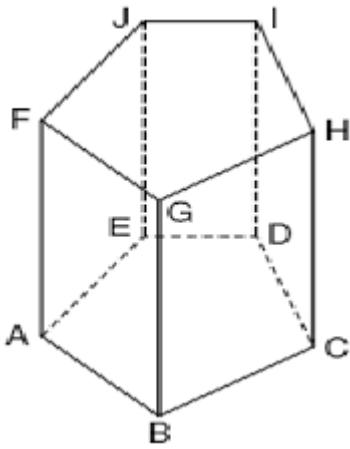
POINT



O, A, B, C are 4 the vertices.

C. 10

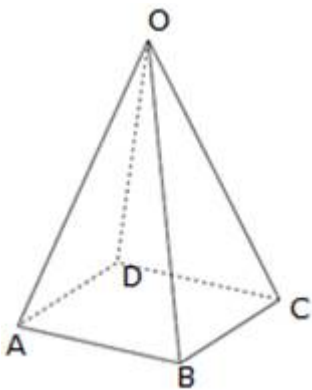
A pentagonal prism has ten vertices.



A, B, C, D, E, F, G, H, I, J are the 10 vertices.

D. 5

A Square Pyramid has five vertices.



O, A, B, C, D are the vertices.

**5. Question**

Verify Euler's relation for each of the following:

- A. A cube
- B. A tetrahedron

C. A triangular prism

D. A square pyramid

**Answer**

A.

According to Euler's Formula

$$F + V - E = 2$$

Where F denotes the number of face

V denotes the number of vertices

E denotes the number of edges.

Shape	Faces	Vertices	Edges	F + V - E
Cube	6	8	12	2

B.

According to Euler's Formula

$$F + V - E = 2$$

Where F denotes the number of face

V denotes the number of vertices

E denotes the number of edges.

Shape	Faces	Vertices	Edges	F + V - E
Tetrahedron	4	4	8	2

C.

According to Euler's Formula



$$F + V - E = 2$$

Where F denotes the number of face

V denotes the number of vertices

E denotes the number of edges.

Shape	Faces	Vertices	Edges	F + V - E
Triangular Prism	5	6	9	2

D.

According to Euler's Formula

$$F + V - E = 2$$

Where F denotes the number of face

V denotes the number of vertices

E denotes the number of edges.

Shape	Faces	Vertices	Edges	F + V - E
Square Pyramid	5	5	8	2